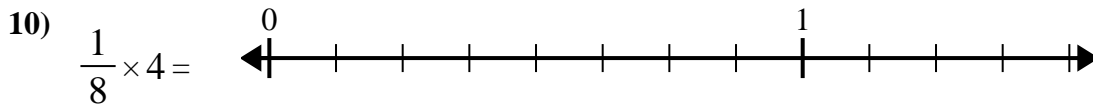
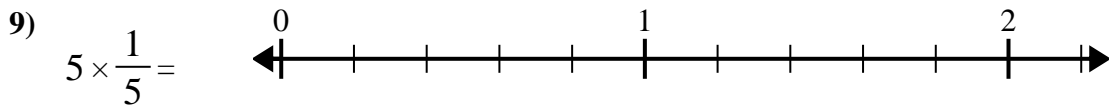
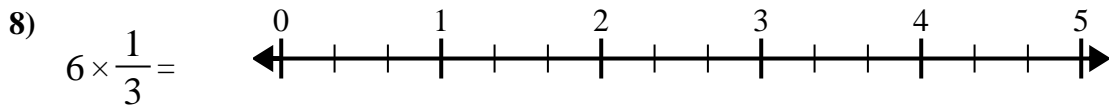
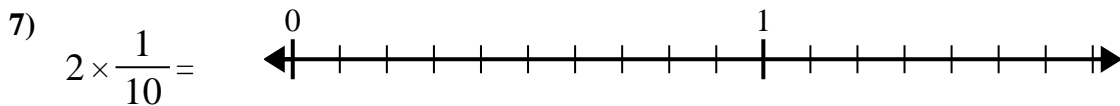
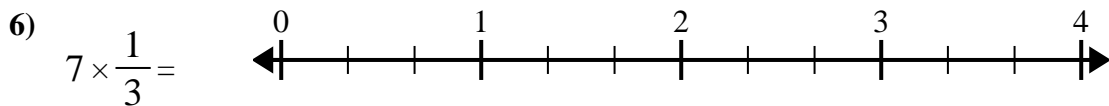
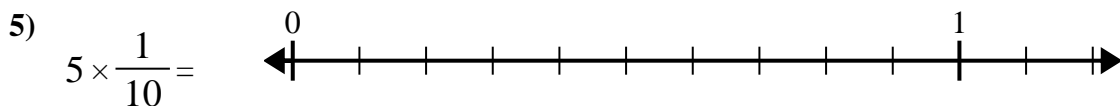
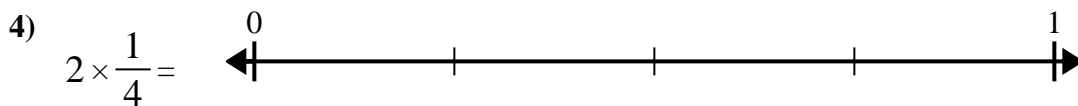
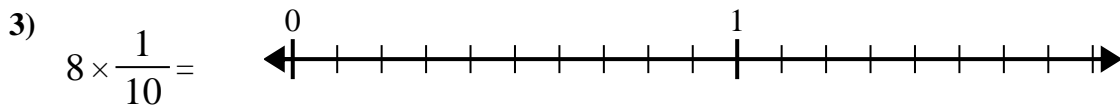
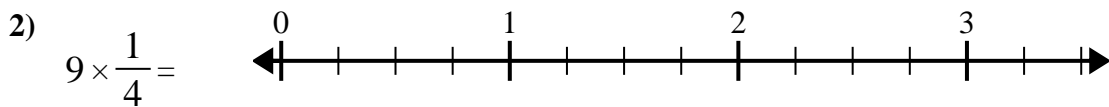
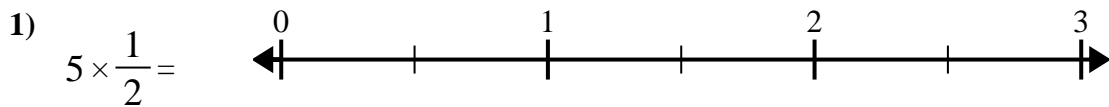




Use the numberline to solve.



Answers

1. _____

2. _____

3. _____

4. _____

5. _____

6. _____

7. _____

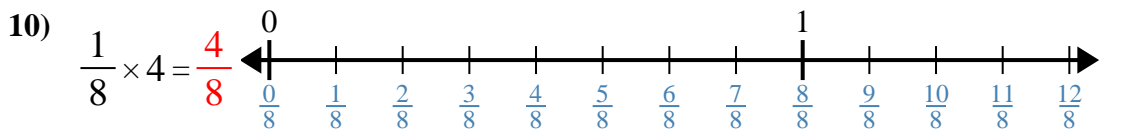
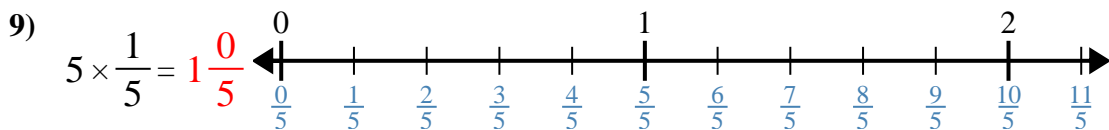
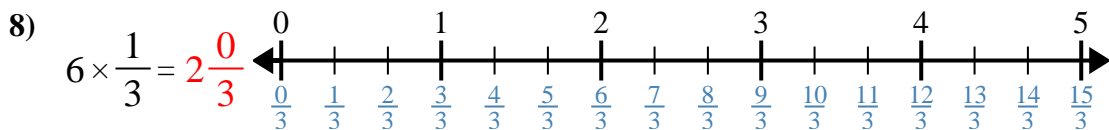
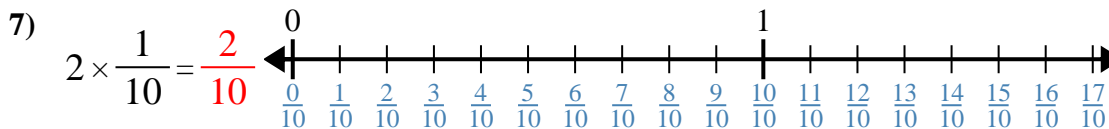
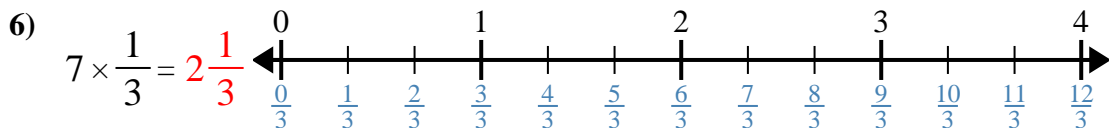
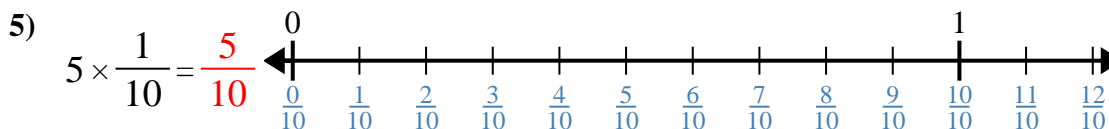
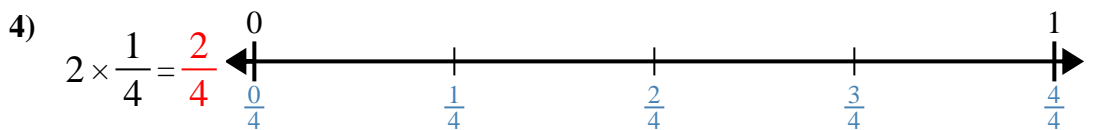
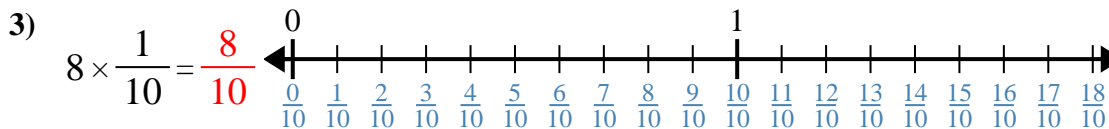
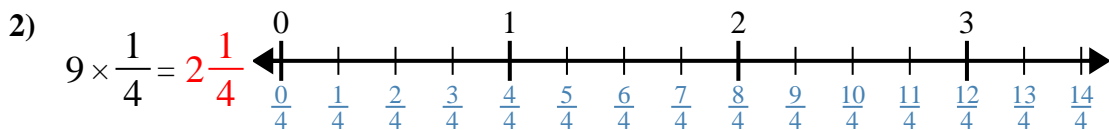
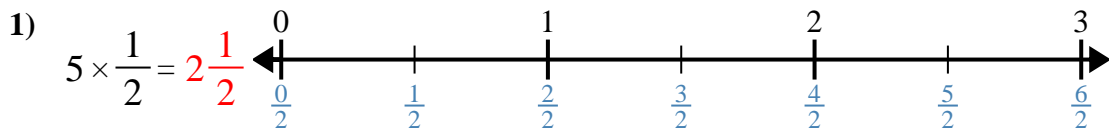
8. _____

9. _____

10. _____



Use the numberline to solve.



Answers

1. $2\frac{1}{2}$

2. $2\frac{1}{4}$

3. $\frac{8}{10}$

4. $\frac{2}{4}$

5. $\frac{5}{10}$

6. $2\frac{1}{3}$

7. $\frac{2}{10}$

8. $2\frac{0}{3}$

9. $1\frac{0}{5}$

10. $\frac{4}{8}$



Use the numberline to solve.

$\frac{4}{8}$	$2\frac{1}{3}$	$2\frac{0}{3}$	$\frac{2}{4}$
$\frac{2}{10}$	$\frac{8}{10}$	$1\frac{0}{5}$	$2\frac{1}{2}$
$\frac{5}{10}$	$2\frac{1}{4}$		

Answers

1)

1. _____

2)

2. _____

3)

3. _____

4)

4. _____

5)

5. _____

6)

6. _____

7)

7. _____

8)

8. _____

9)

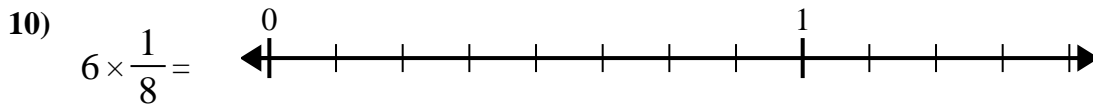
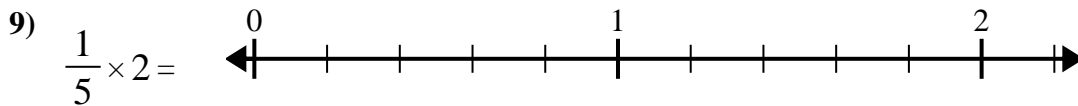
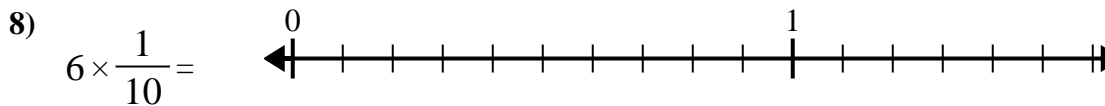
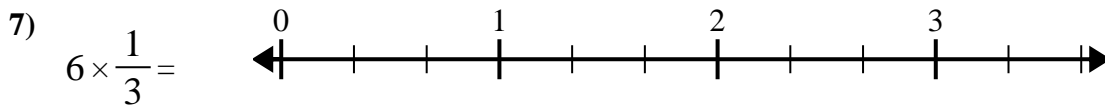
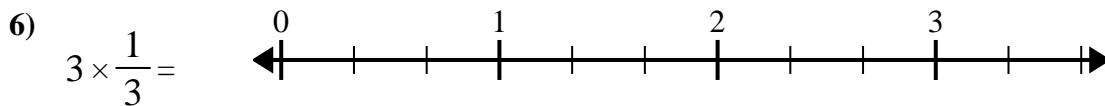
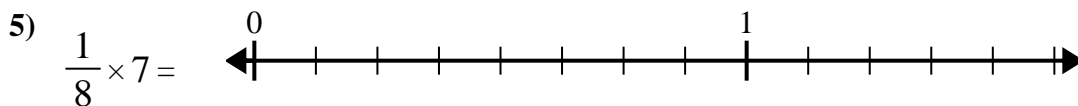
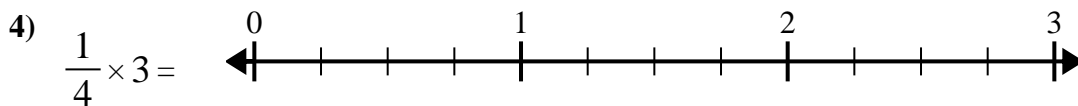
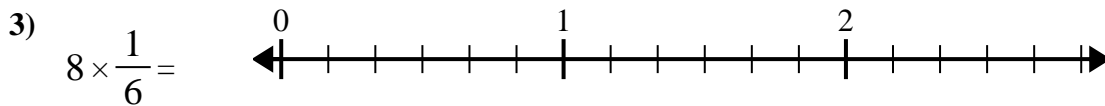
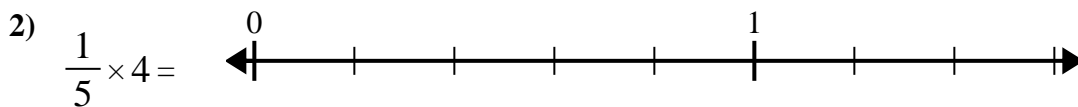
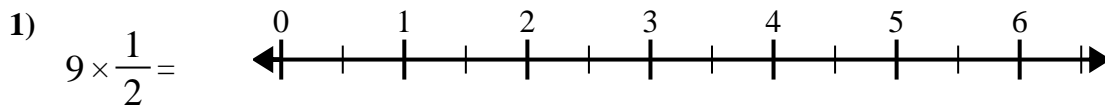
9. _____

10)

10. _____



Use the numberline to solve.

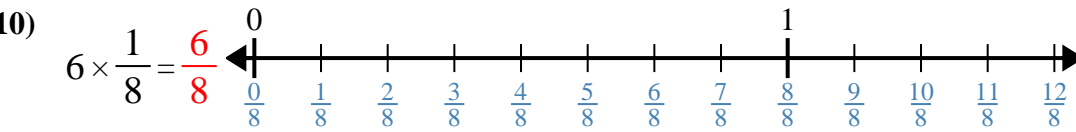
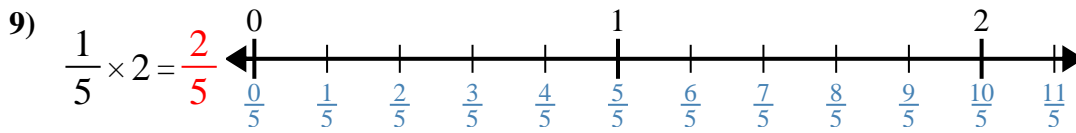
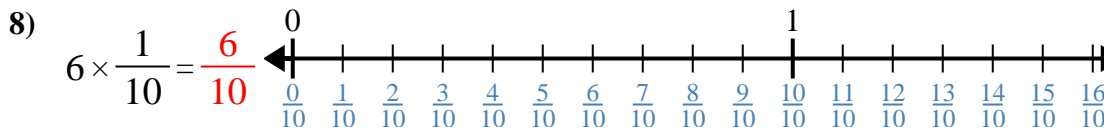
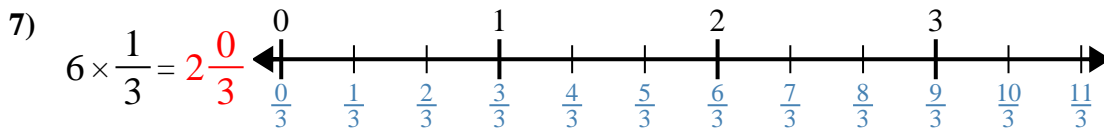
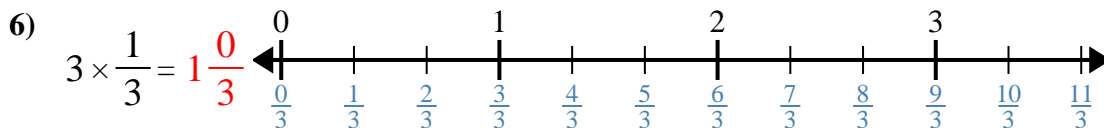
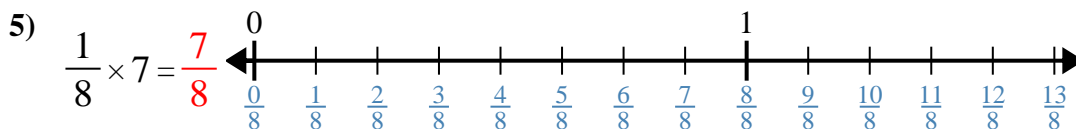
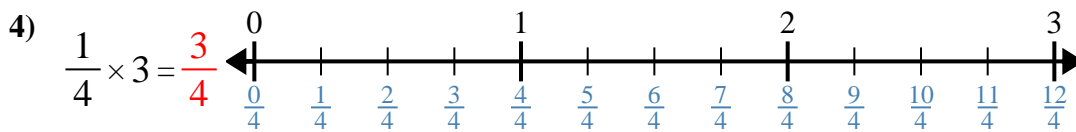
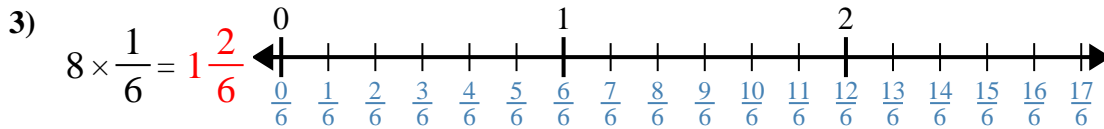
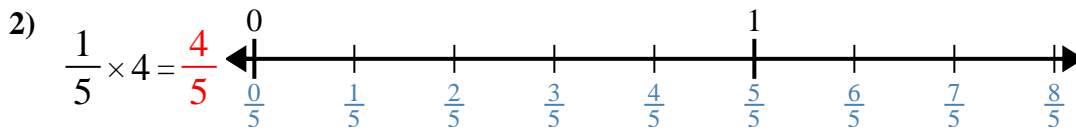
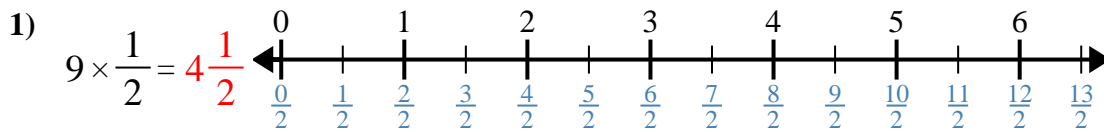


Answers

1. _____
2. _____
3. _____
4. _____
5. _____
6. _____
7. _____
8. _____
9. _____
10. _____



Use the numberline to solve.



Answers

1. $4\frac{1}{2}$
2. $\frac{4}{5}$
3. $1\frac{2}{6}$
4. $\frac{3}{4}$
5. $\frac{7}{8}$
6. $1\frac{0}{3}$
7. $2\frac{0}{3}$
8. $\frac{6}{10}$
9. $\frac{2}{5}$
10. $\frac{6}{8}$



Use the numberline to solve.

Answers

$1\frac{2}{6}$

$4\frac{1}{2}$

$\frac{4}{5}$

$2\frac{0}{3}$

$\frac{3}{4}$

$1\frac{0}{3}$

$\frac{6}{8}$

$\frac{2}{5}$

$\frac{6}{10}$

$\frac{7}{8}$

1)

1. _____

2)

2. _____

3)

3. _____

4)

4. _____

5)

5. _____

6)

6. _____

7)

7. _____

8)

8. _____

9)

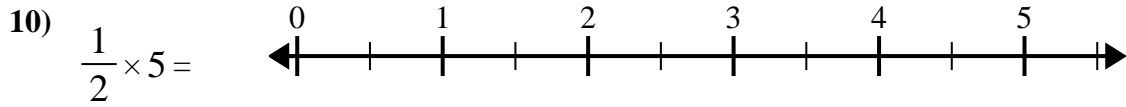
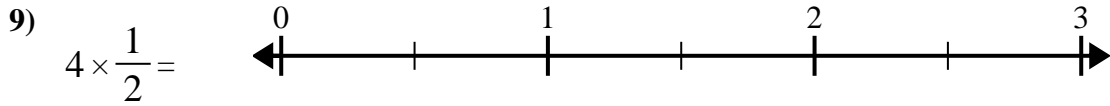
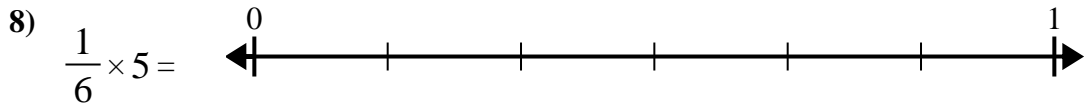
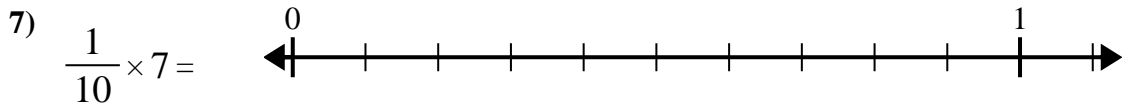
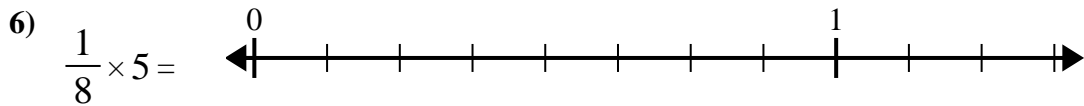
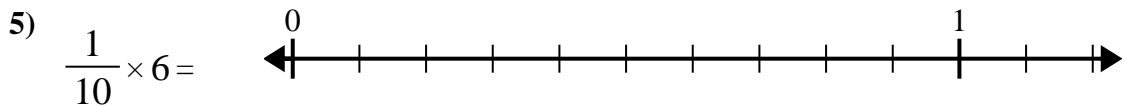
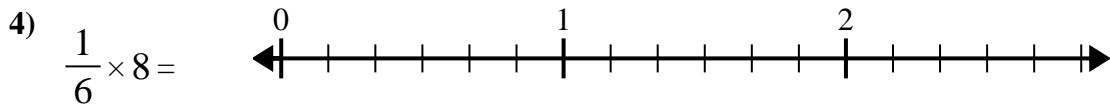
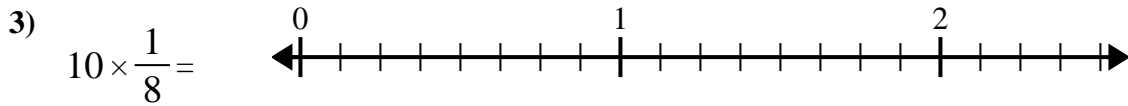
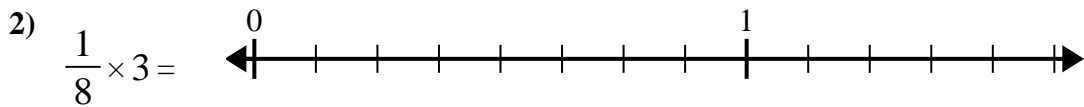
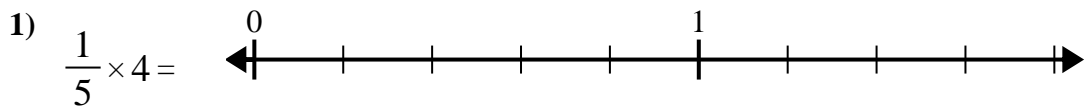
9. _____

10)

10. _____



Use the numberline to solve.



Answers

1. _____

2. _____

3. _____

4. _____

5. _____

6. _____

7. _____

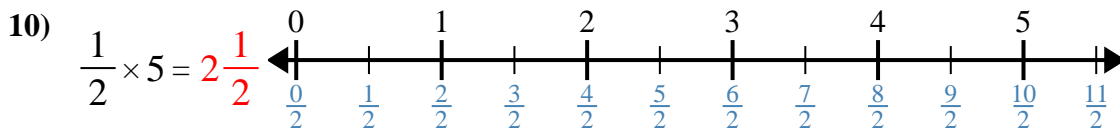
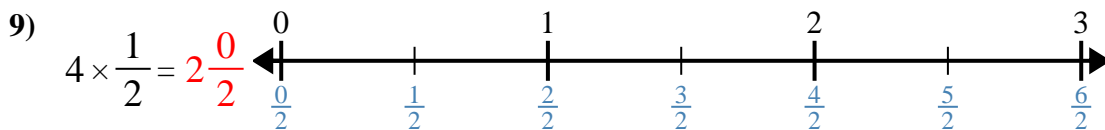
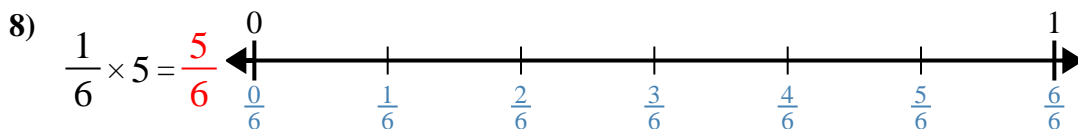
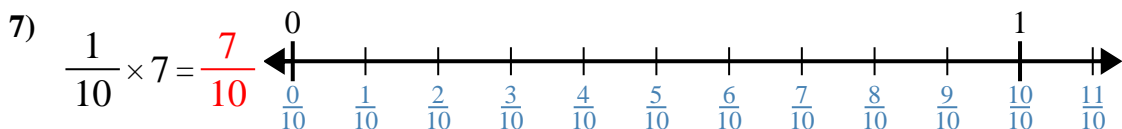
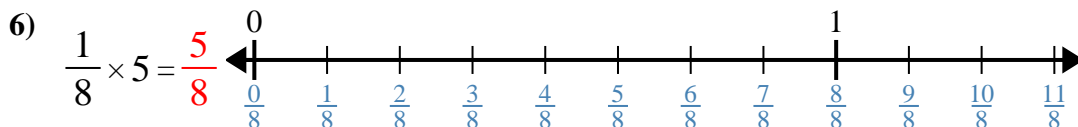
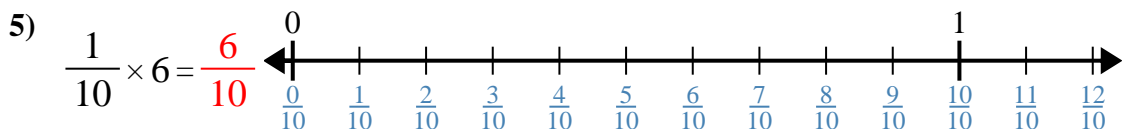
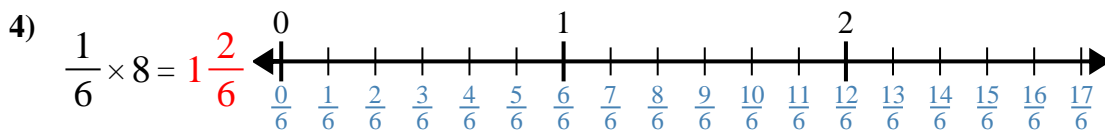
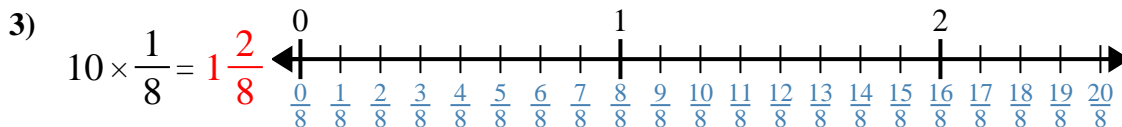
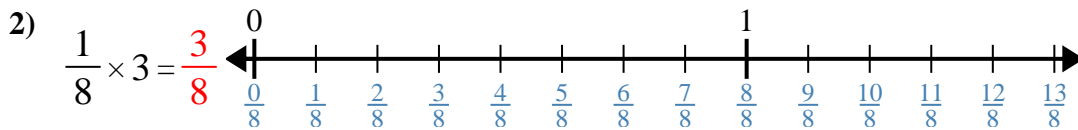
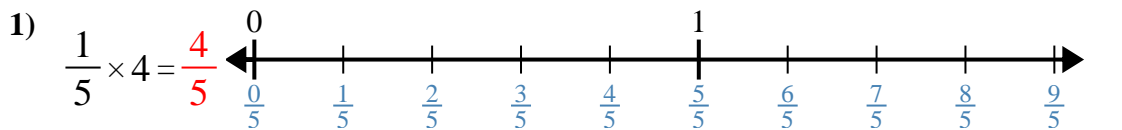
8. _____

9. _____

10. _____



Use the numberline to solve.



Answers

1. $\frac{4}{5}$

2. $\frac{3}{8}$

3. $1\frac{2}{8}$

4. $1\frac{2}{6}$

5. $\frac{6}{10}$

6. $\frac{5}{8}$

7. $\frac{7}{10}$

8. $\frac{5}{6}$

9. $2\frac{0}{2}$

10. $2\frac{1}{2}$



Use the numberline to solve.

$2\frac{1}{2}$	$\frac{5}{6}$	$1\frac{2}{8}$	$\frac{5}{8}$
$\frac{4}{5}$	$2\frac{0}{2}$	$\frac{7}{10}$	$\frac{3}{8}$
$1\frac{2}{6}$	$\frac{6}{10}$		

Answers

1)

1. _____

2)

2. _____

3)

3. _____

4)

4. _____

5)

5. _____

6)

6. _____

7)

7. _____

8)

8. _____

9)

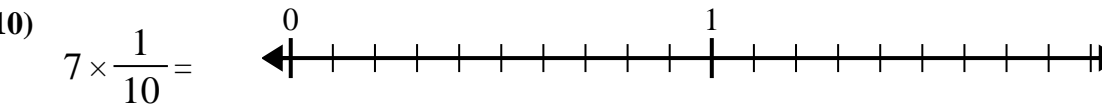
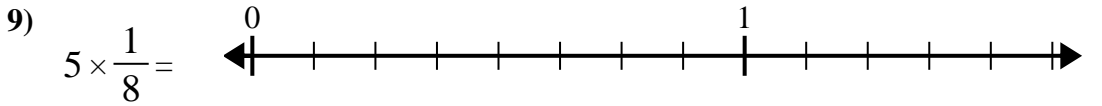
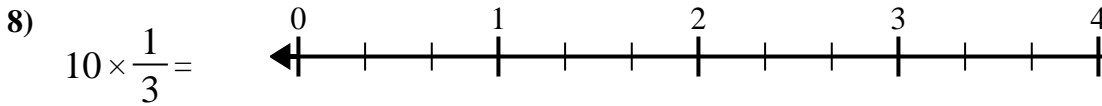
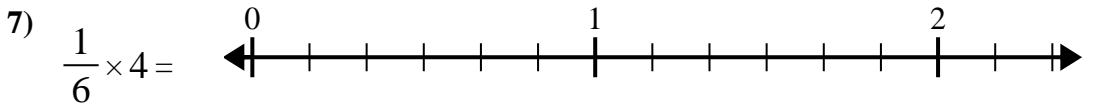
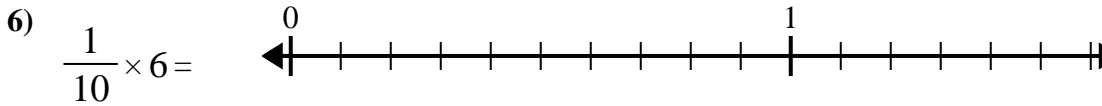
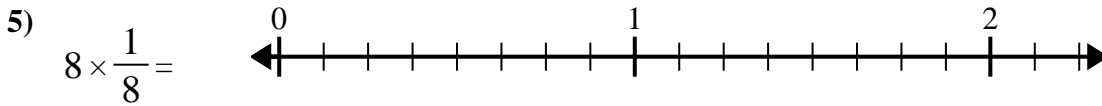
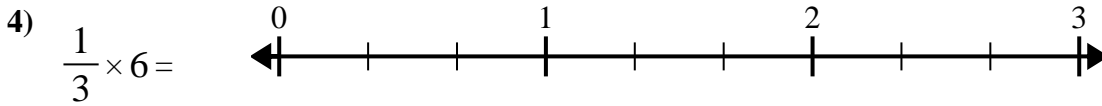
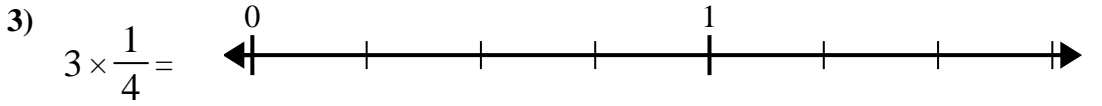
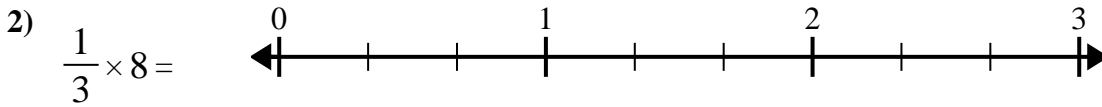
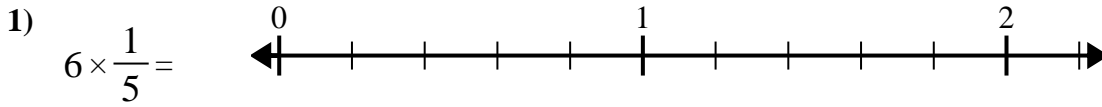
9. _____

10)

10. _____



Use the numberline to solve.

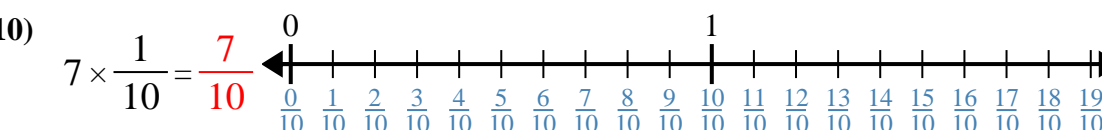
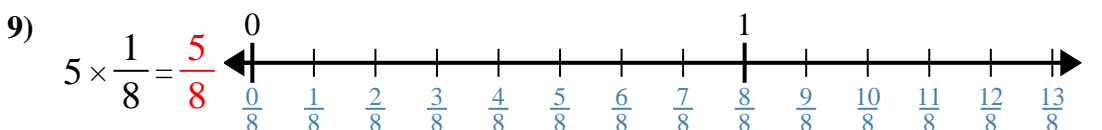
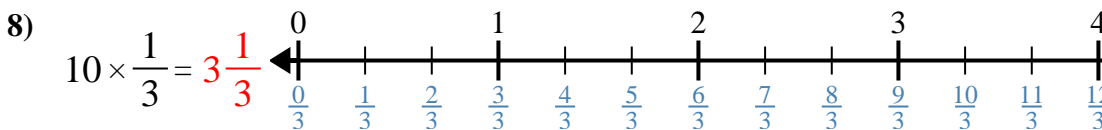
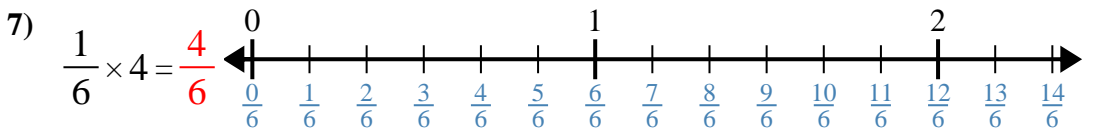
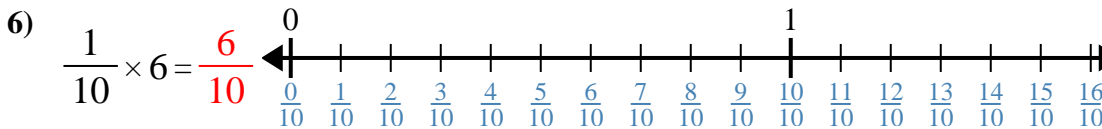
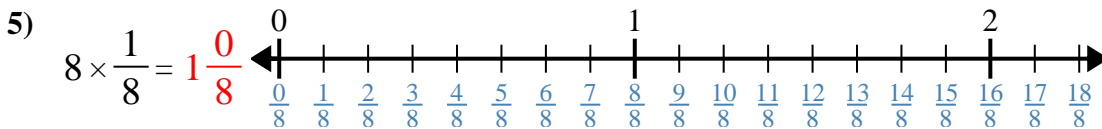
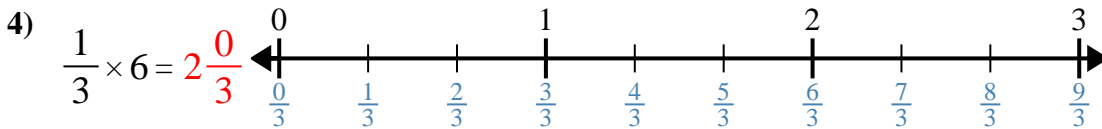
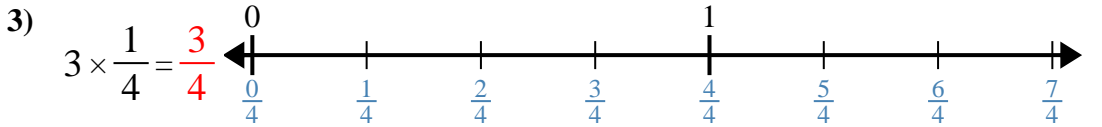
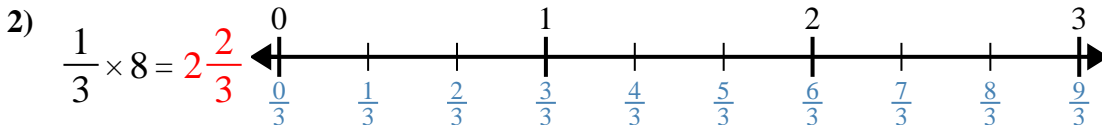
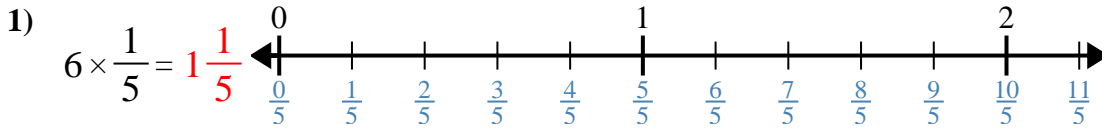


Answers

1. _____
2. _____
3. _____
4. _____
5. _____
6. _____
7. _____
8. _____
9. _____
10. _____



Use the numberline to solve.



Answers

1. $1\frac{1}{5}$

2. $2\frac{2}{3}$

3. $\frac{3}{4}$

4. $2\frac{0}{3}$

5. $1\frac{0}{8}$

6. $\frac{6}{10}$

7. $\frac{4}{6}$

8. $3\frac{1}{3}$

9. $\frac{5}{8}$

10. $\frac{7}{10}$



Use the numberline to solve.

$1\frac{1}{5}$

$1\frac{0}{8}$

$2\frac{2}{3}$

$\frac{7}{10}$

$\frac{6}{10}$

$\frac{4}{6}$

$3\frac{1}{3}$

$\frac{3}{4}$

$\frac{5}{8}$

$2\frac{0}{3}$

Answers

1)

1. _____

2)

2. _____

3)

3. _____

4)

4. _____

5)

5. _____

6)

6. _____

7)

7. _____

8)

8. _____

9)

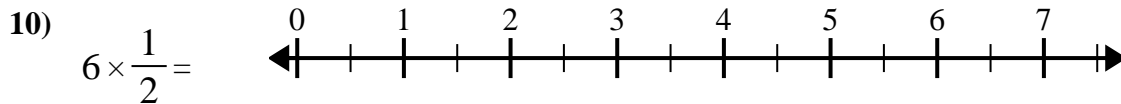
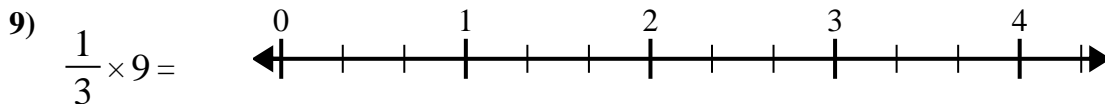
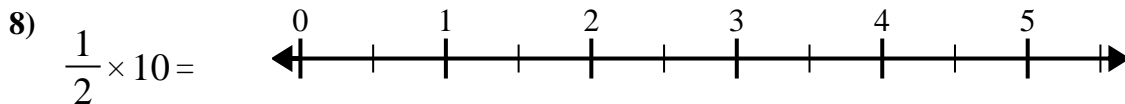
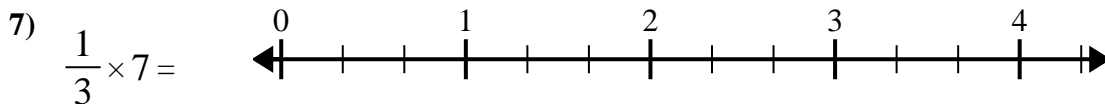
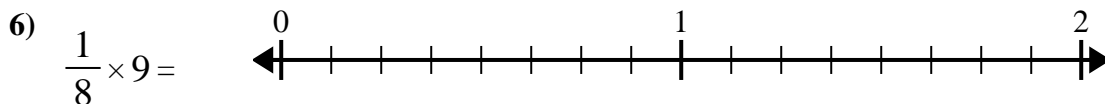
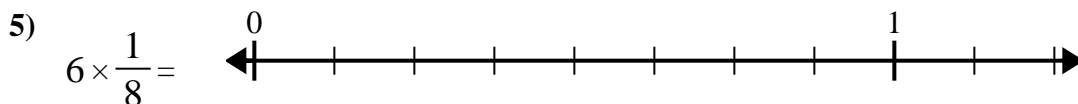
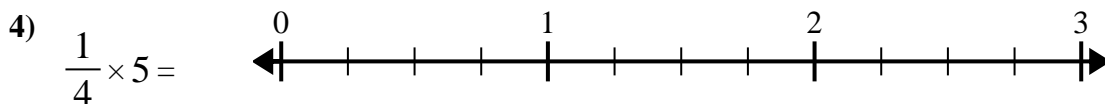
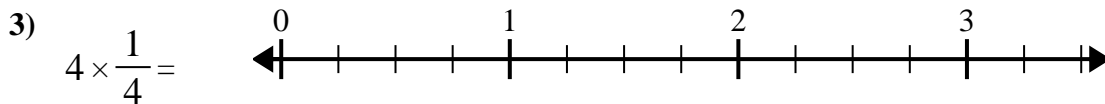
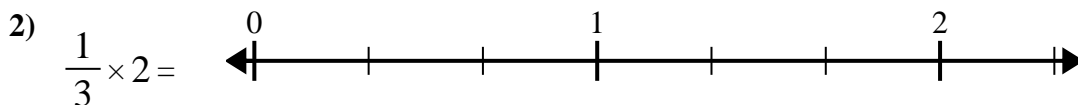
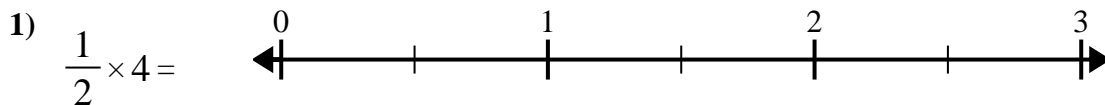
9. _____

10)

10. _____



Use the numberline to solve.

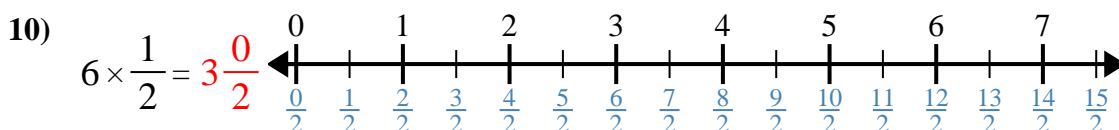
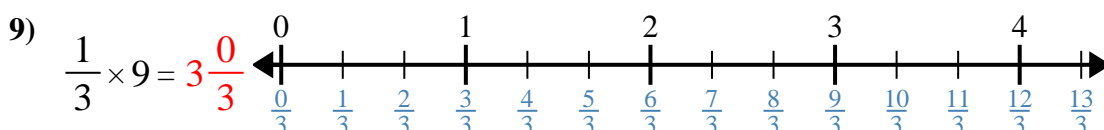
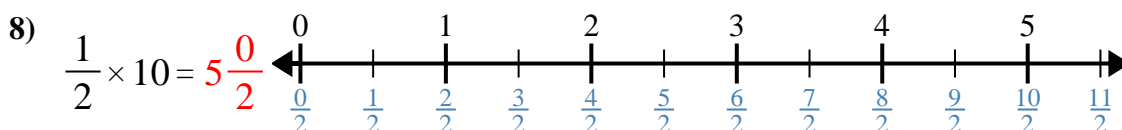
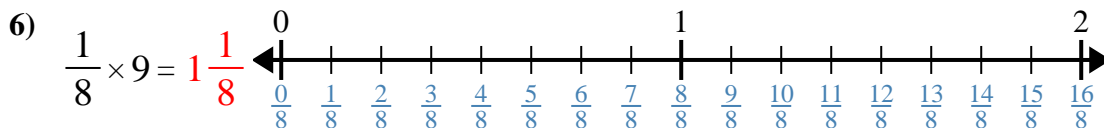
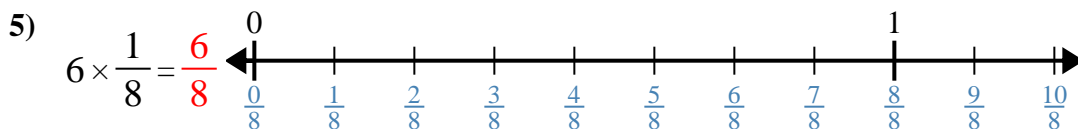
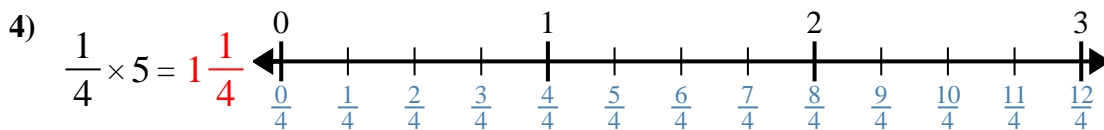
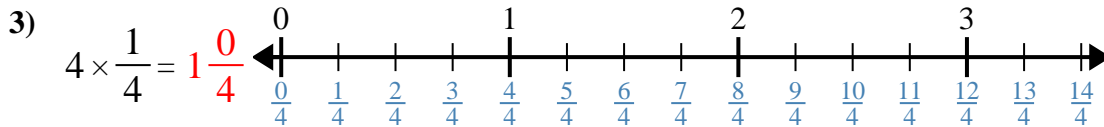
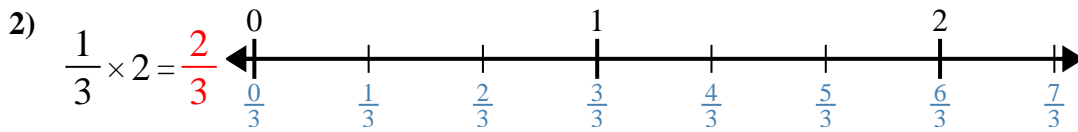
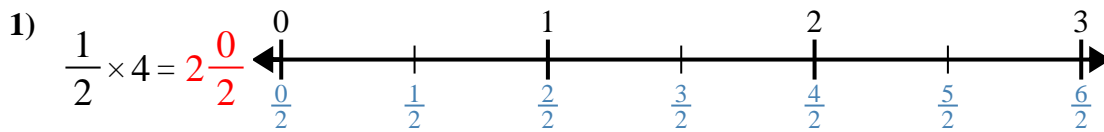


Answers

1. _____
2. _____
3. _____
4. _____
5. _____
6. _____
7. _____
8. _____
9. _____
10. _____



Use the numberline to solve.



Answers

1. $2\frac{0}{2}$
2. $\frac{2}{3}$
3. $1\frac{0}{4}$
4. $1\frac{1}{4}$
5. $\frac{6}{8}$
6. $1\frac{1}{8}$
7. $2\frac{1}{3}$
8. $5\frac{0}{2}$
9. $3\frac{0}{3}$
10. $3\frac{0}{2}$



Use the numberline to solve.

Answers

$1\frac{1}{8}$

$\frac{2}{3}$

$5\frac{0}{2}$

$3\frac{0}{3}$

$2\frac{0}{2}$

$2\frac{1}{3}$

$3\frac{0}{2}$

$\frac{6}{8}$

$1\frac{1}{4}$

$1\frac{0}{4}$

1)

1. _____

2)

2. _____

3)

3. _____

4)

4. _____

5)

5. _____

6)

6. _____

7)

7. _____

8)

8. _____

9)

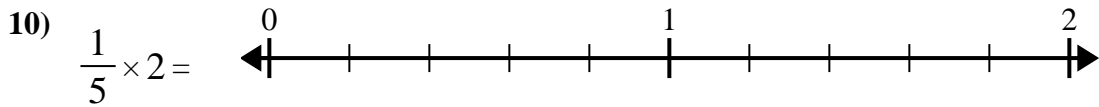
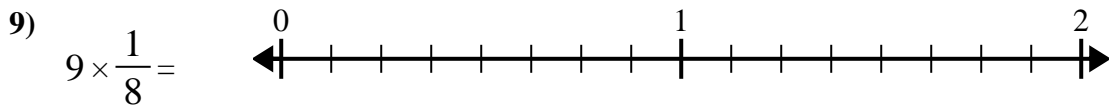
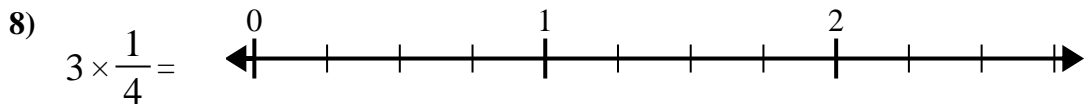
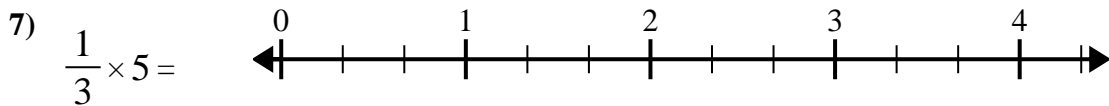
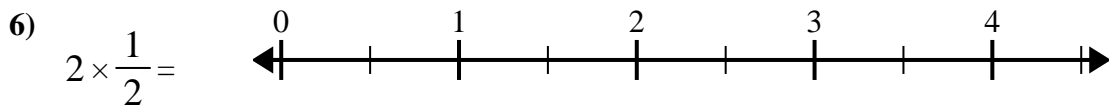
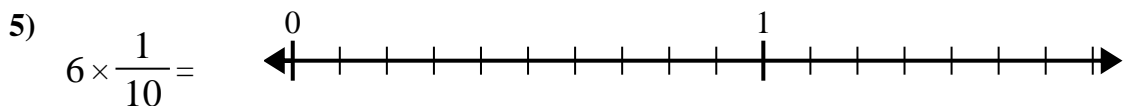
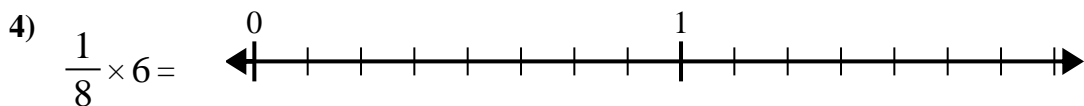
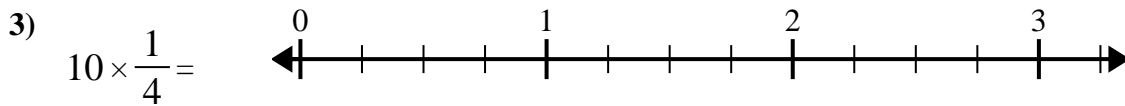
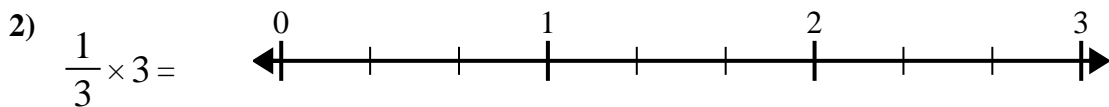
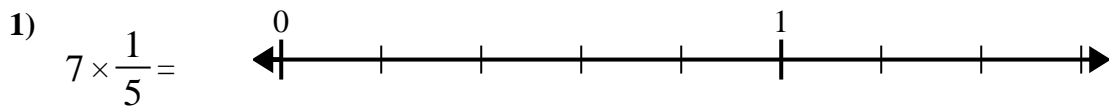
9. _____

10)

10. _____



Use the numberline to solve.



Answers

1. _____

2. _____

3. _____

4. _____

5. _____

6. _____

7. _____

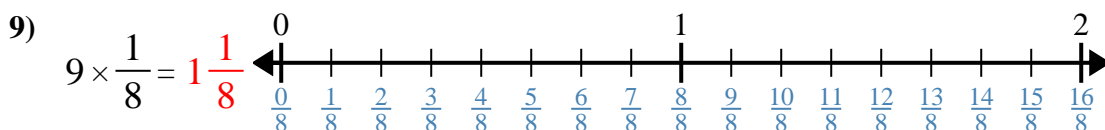
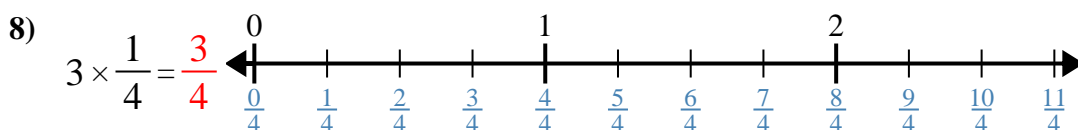
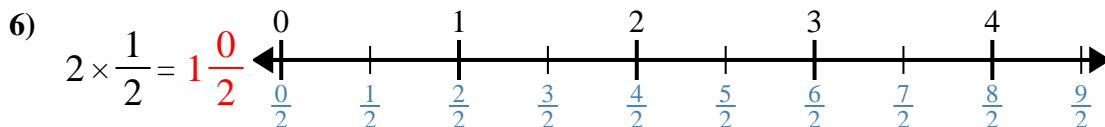
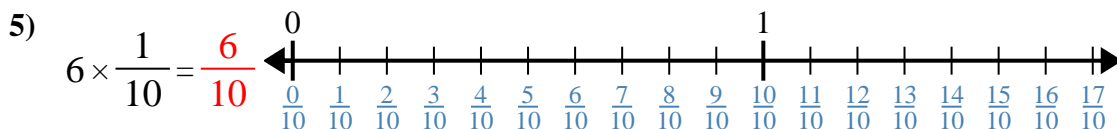
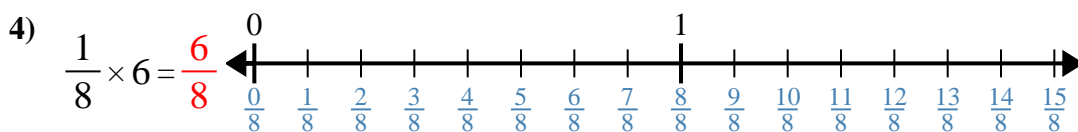
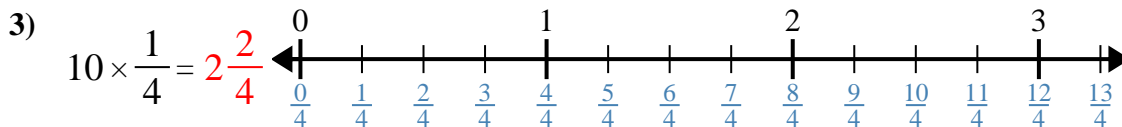
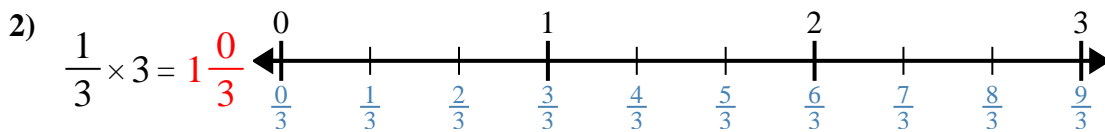
8. _____

9. _____

10. _____



Use the numberline to solve.



Answers

1. $1\frac{2}{5}$

2. $1\frac{0}{3}$

3. $2\frac{2}{4}$

4. $\frac{6}{8}$

5. $\frac{6}{10}$

6. $1\frac{0}{2}$

7. $1\frac{2}{3}$

8. $\frac{3}{4}$

9. $1\frac{1}{8}$

10. $\frac{2}{5}$



Use the numberline to solve.

$1 \frac{0}{3}$

$1 \frac{0}{2}$

$\frac{6}{10}$

$\frac{2}{5}$

$1 \frac{2}{5}$

$\frac{6}{8}$

$\frac{3}{4}$

$1 \frac{1}{8}$

$1 \frac{2}{3}$

$2 \frac{2}{4}$

Answers

1)

1. _____

2)

2. _____

3)

3. _____

4)

4. _____

5)

5. _____

6)

6. _____

7)

7. _____

8)

8. _____

9)

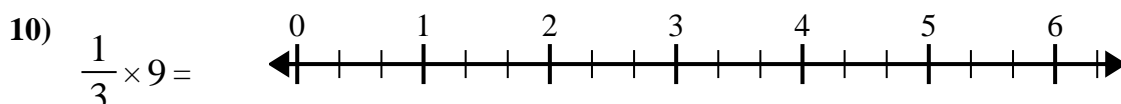
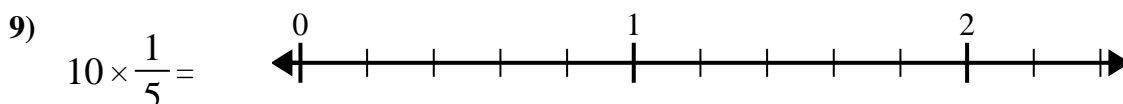
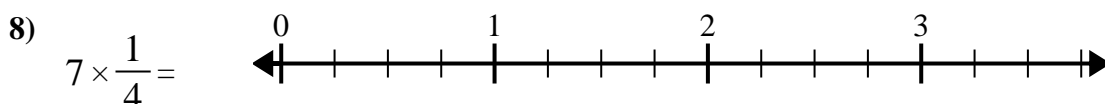
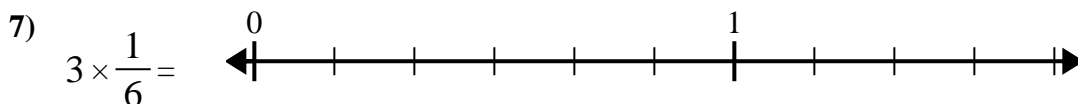
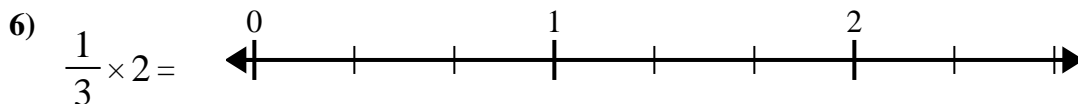
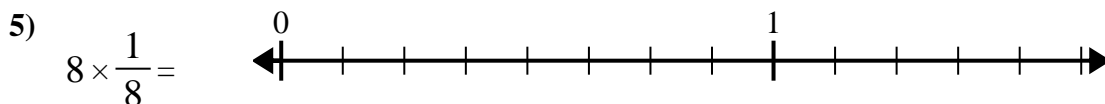
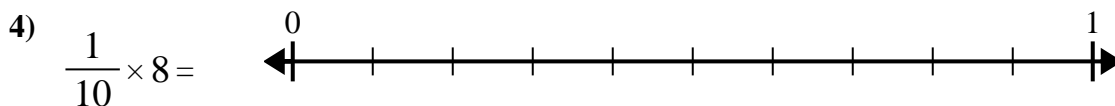
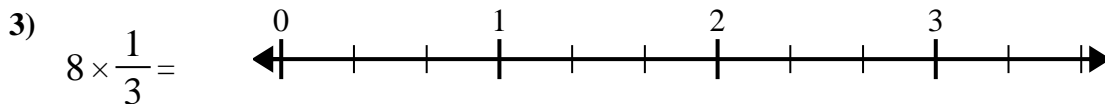
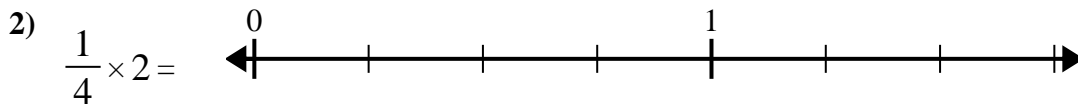
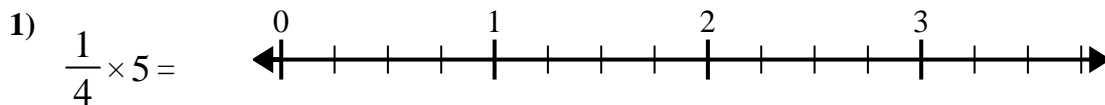
9. _____

10)

10. _____



Use the numberline to solve.



Answers

1. _____

2. _____

3. _____

4. _____

5. _____

6. _____

7. _____

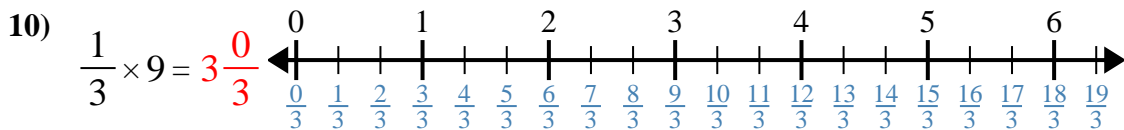
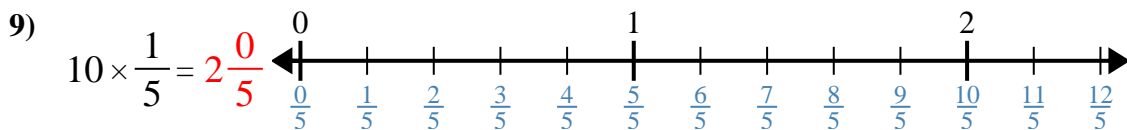
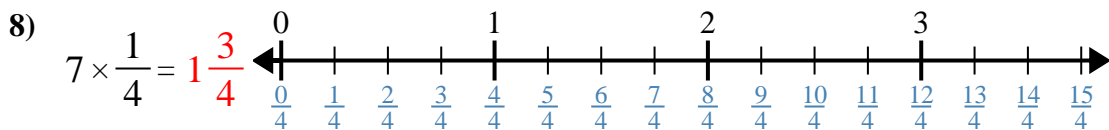
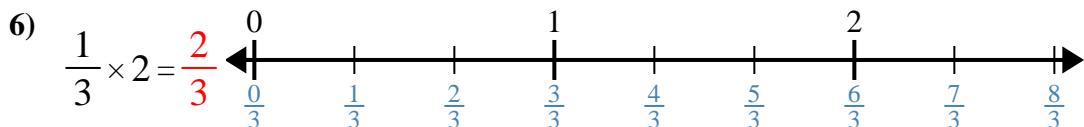
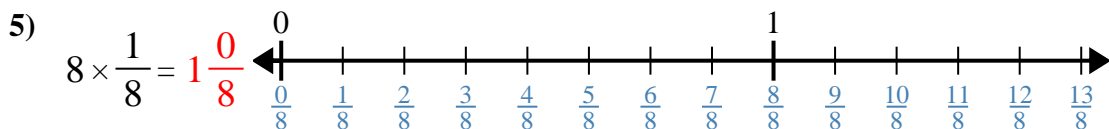
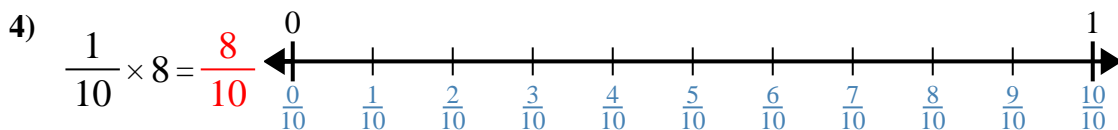
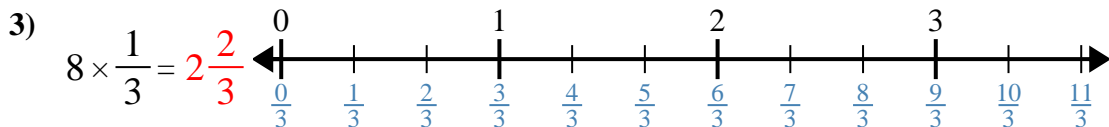
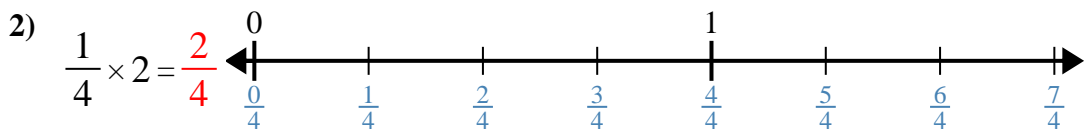
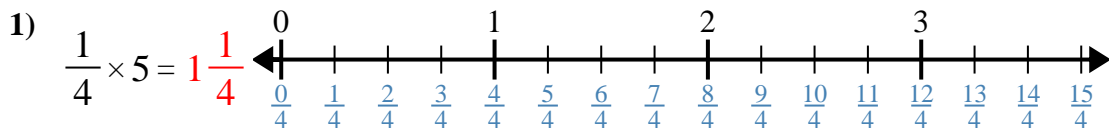
8. _____

9. _____

10. _____



Use the numberline to solve.



Answers

1. $1\frac{1}{4}$

2. $\frac{2}{4}$

3. $2\frac{2}{3}$

4. $\frac{8}{10}$

5. $1\frac{0}{8}$

6. $\frac{2}{3}$

7. $\frac{3}{6}$

8. $1\frac{3}{4}$

9. $2\frac{0}{5}$

10. $3\frac{0}{3}$



Use the numberline to solve.

Answers

$3 \frac{0}{3}$

$\frac{8}{10}$

$\frac{2}{3}$

$2 \frac{2}{3}$

$1 \frac{1}{4}$

$\frac{2}{4}$

$\frac{3}{6}$

$1 \frac{0}{8}$

$2 \frac{0}{5}$

$1 \frac{3}{4}$

1)

1. _____

2)

2. _____

3)

3. _____

4)

4. _____

5)

5. _____

6)

6. _____

7)

7. _____

8)

8. _____

9)

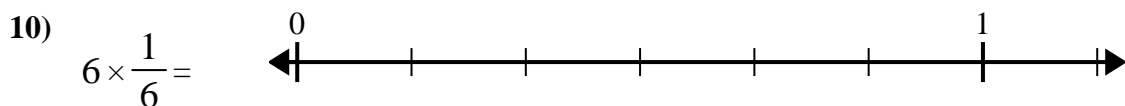
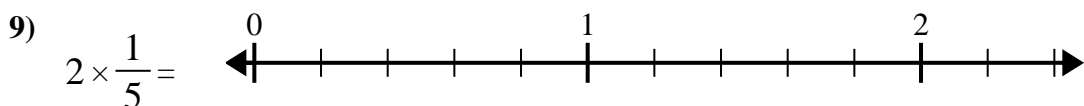
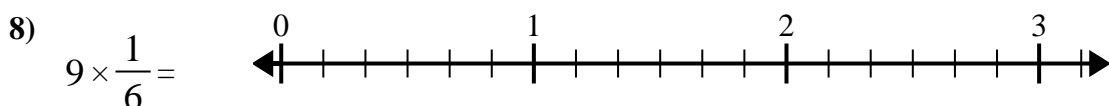
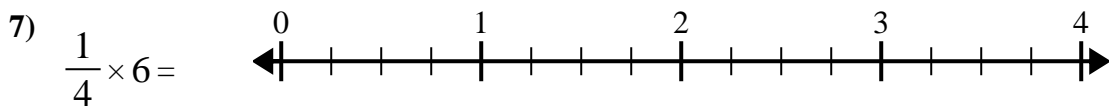
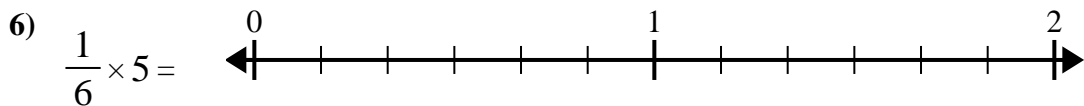
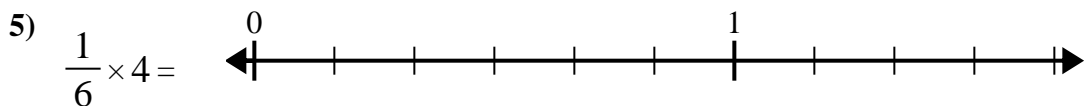
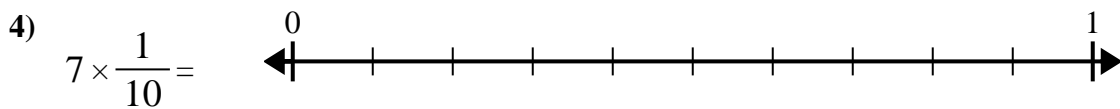
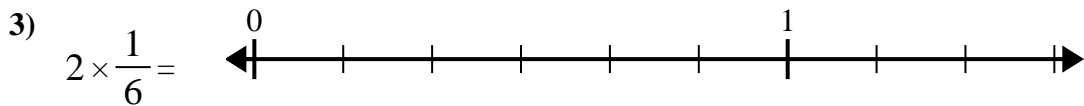
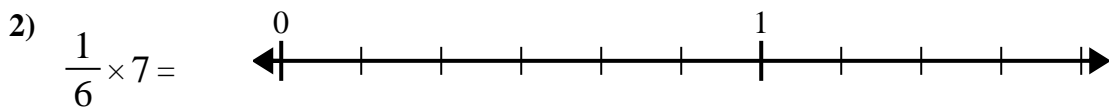
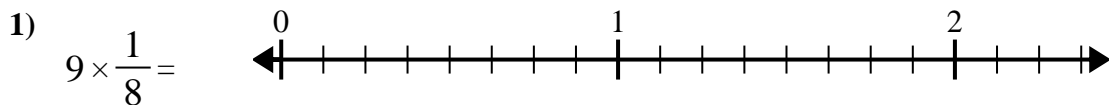
9. _____

10)

10. _____



Use the numberline to solve.



Answers

1. _____

2. _____

3. _____

4. _____

5. _____

6. _____

7. _____

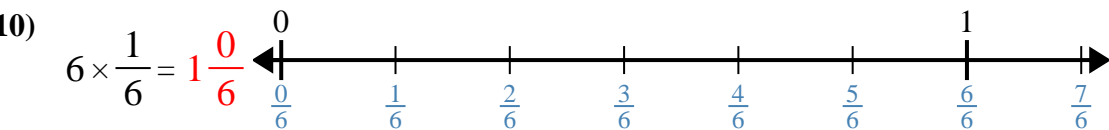
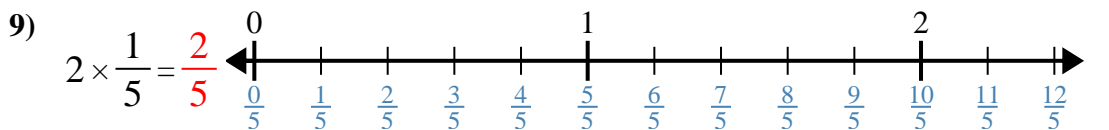
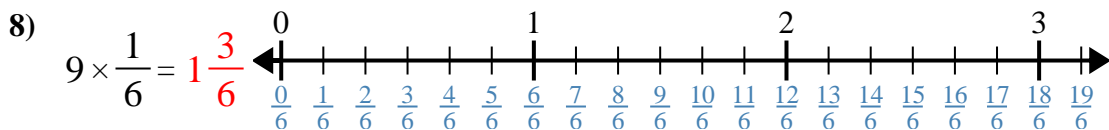
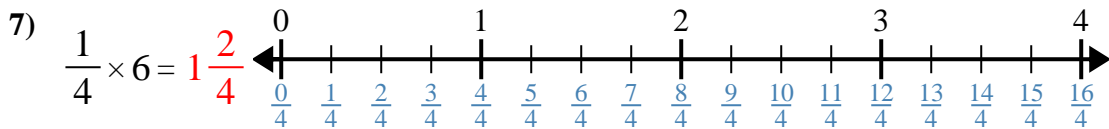
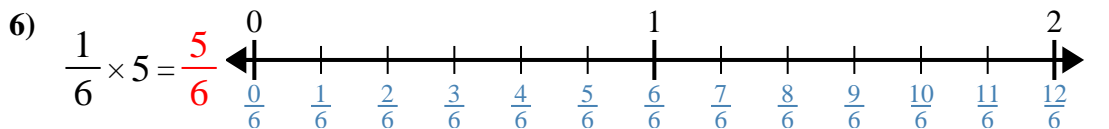
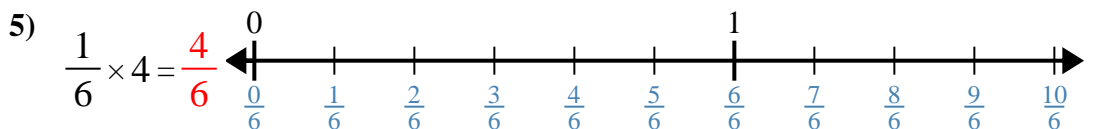
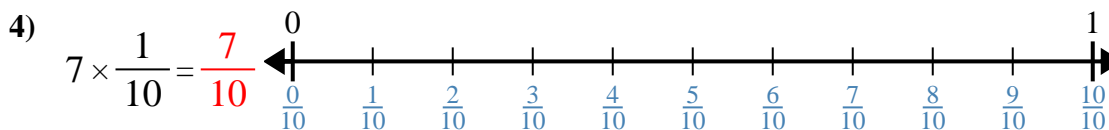
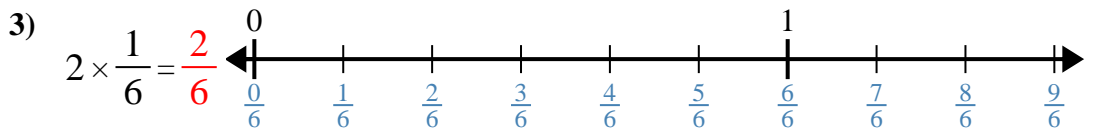
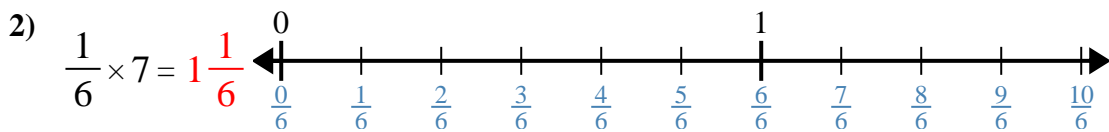
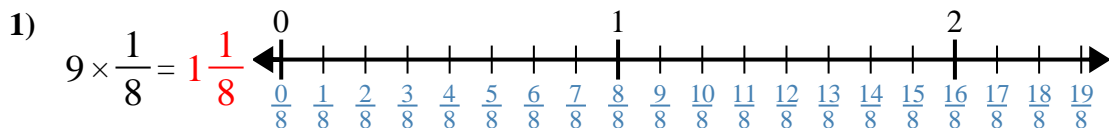
8. _____

9. _____

10. _____



Use the numberline to solve.



Answers

1. 1¹/₈

2. 1¹/₆

3. 2/6

4. 7/10

5. 4/6

6. 5/6

7. 1²/₄

8. 1³/₆

9. 2/5

10. 1⁰/₆



Use the numberline to solve.

Answers

$1\frac{2}{4}$

$1\frac{3}{6}$

$\frac{4}{6}$

$1\frac{1}{8}$

$\frac{7}{10}$

$\frac{2}{5}$

$\frac{5}{6}$

$1\frac{1}{6}$

$1\frac{0}{6}$

$\frac{2}{6}$

1)

1. _____

2)

2. _____

3)

3. _____

4)

4. _____

5)

5. _____

6)

6. _____

7)

7. _____

8)

8. _____

9)

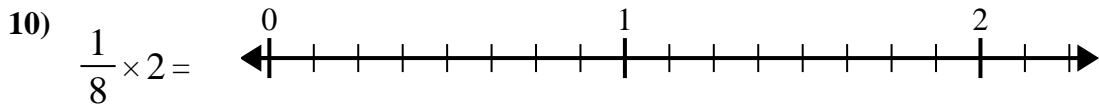
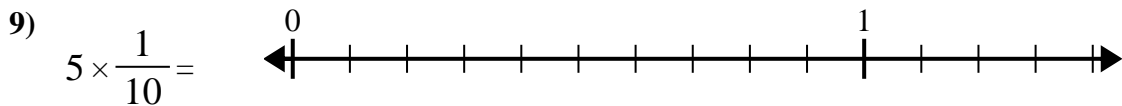
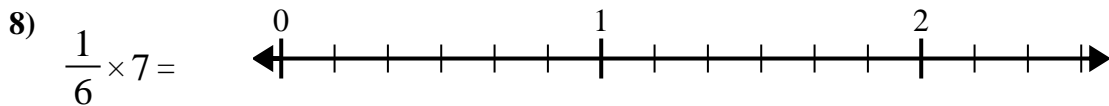
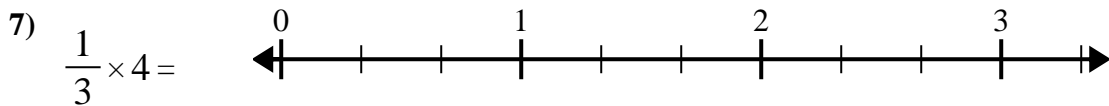
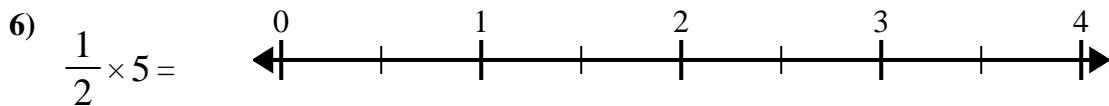
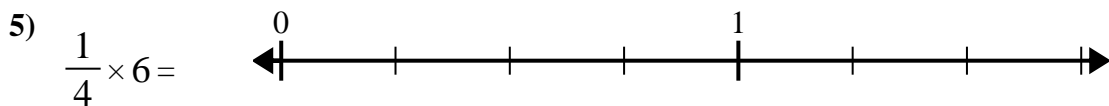
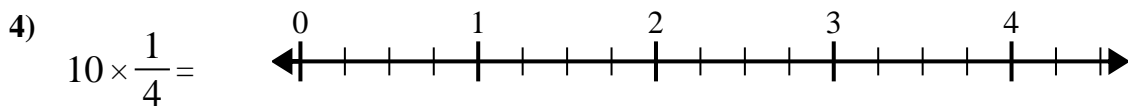
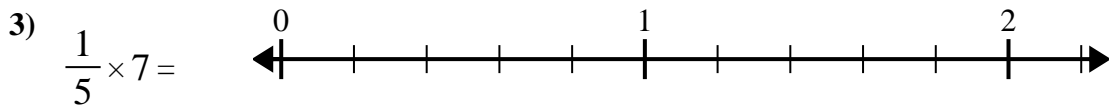
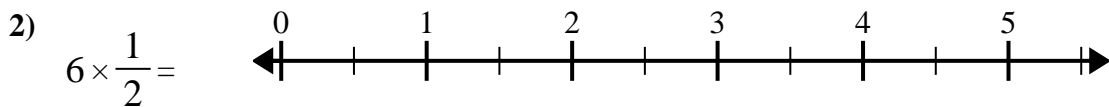
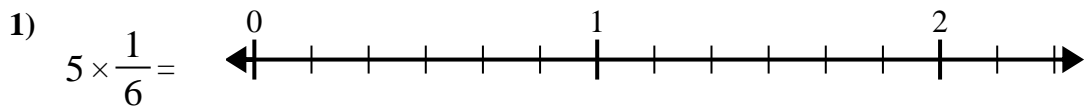
9. _____

10)

10. _____



Use the numberline to solve.



Answers

1. _____

2. _____

3. _____

4. _____

5. _____

6. _____

7. _____

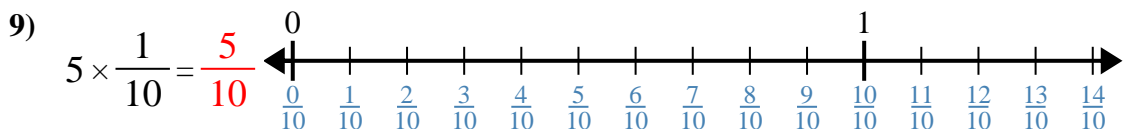
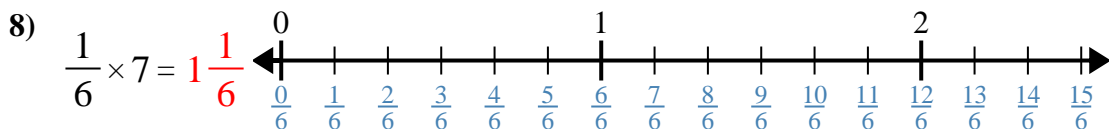
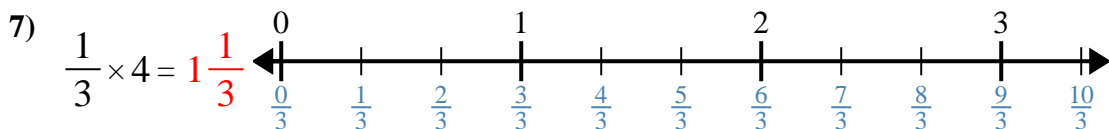
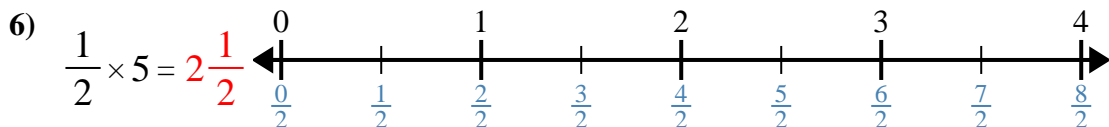
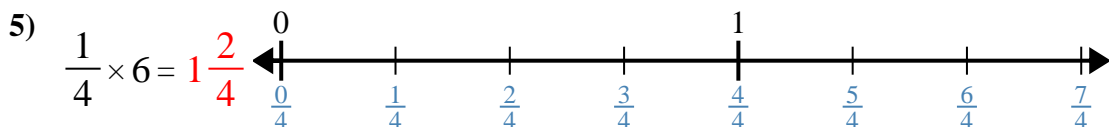
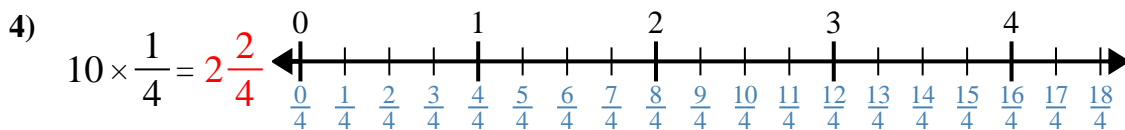
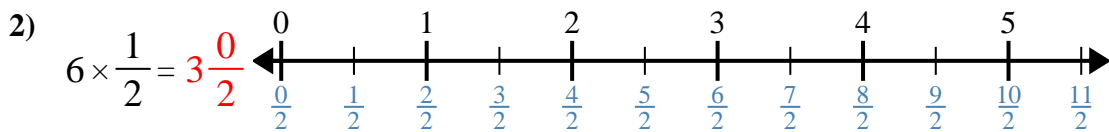
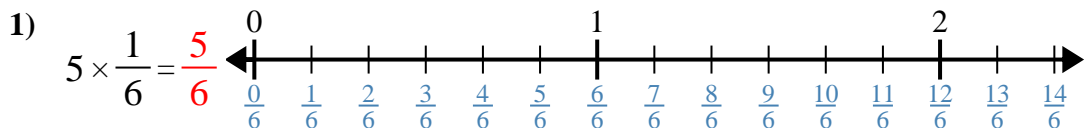
8. _____

9. _____

10. _____



Use the numberline to solve.



Answers

1. $\frac{5}{6}$

2. $3\frac{0}{2}$

3. $1\frac{2}{5}$

4. $2\frac{2}{4}$

5. $1\frac{2}{4}$

6. $2\frac{1}{2}$

7. $1\frac{1}{3}$

8. $1\frac{1}{6}$

9. $\frac{5}{10}$

10. $\frac{2}{8}$



Use the numberline to solve.

$1\frac{1}{3}$

$\frac{5}{10}$

$1\frac{2}{5}$

$1\frac{2}{4}$

$\frac{2}{8}$

$\frac{5}{6}$

$1\frac{1}{6}$

$3\frac{0}{2}$

$2\frac{2}{4}$

$2\frac{1}{2}$

Answers

1)

1. _____

2)

2. _____

3)

3. _____

4)

4. _____

5)

5. _____

6)

6. _____

7)

7. _____

8)

8. _____

9)

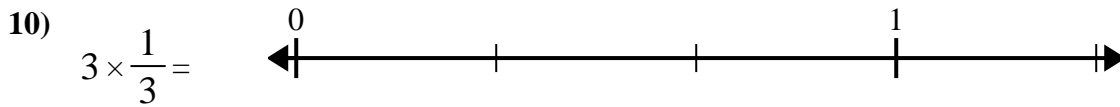
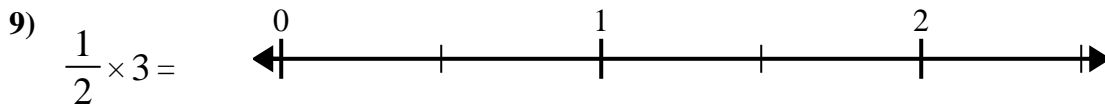
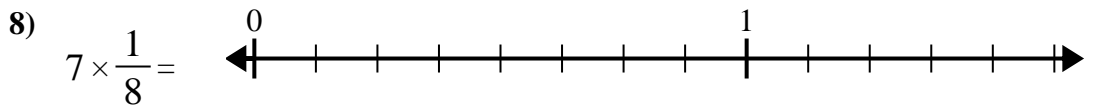
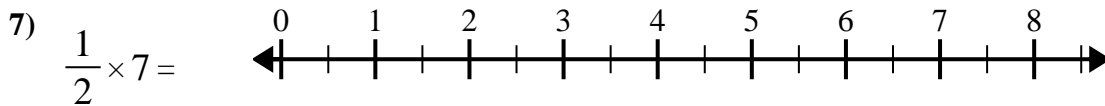
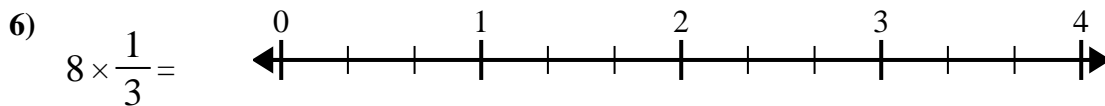
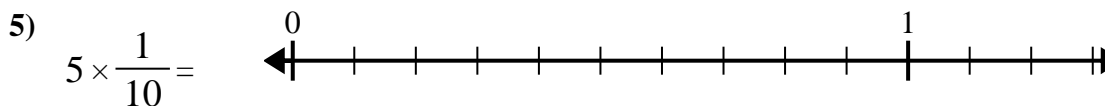
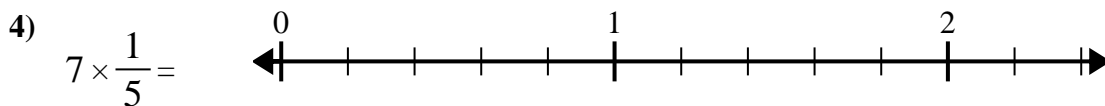
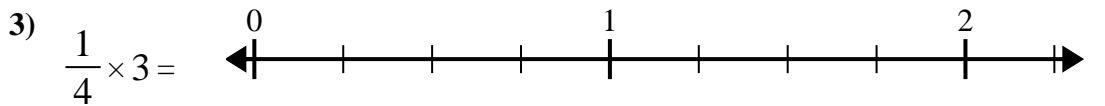
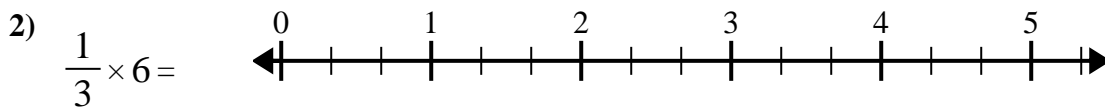
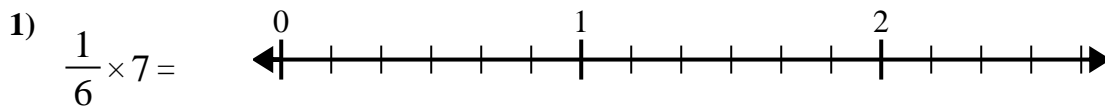
9. _____

10)

10. _____



Use the numberline to solve.

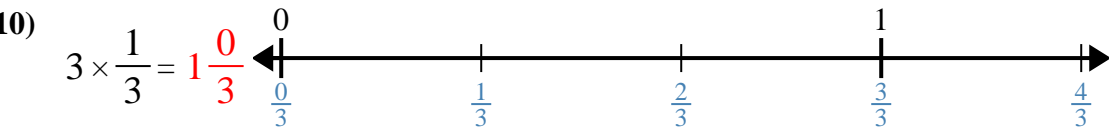
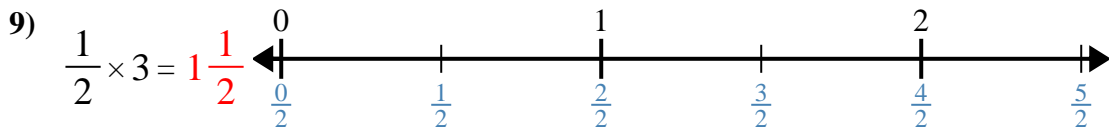
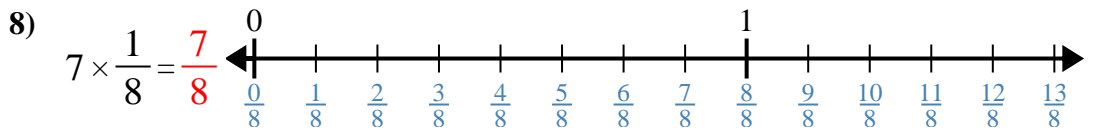
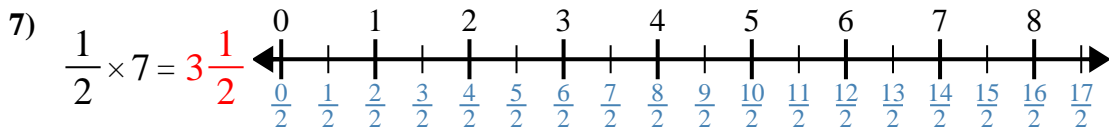
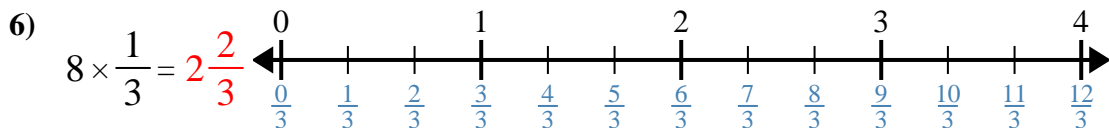
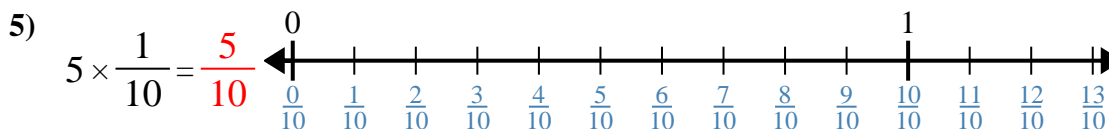
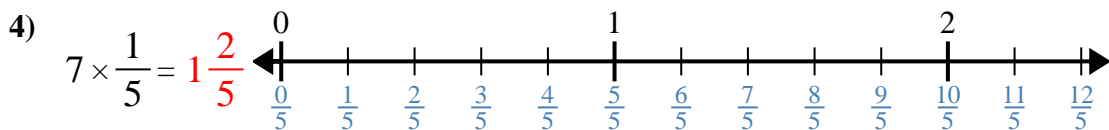
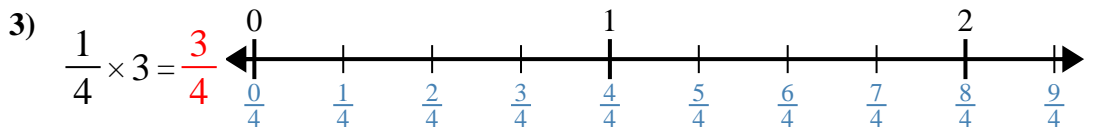
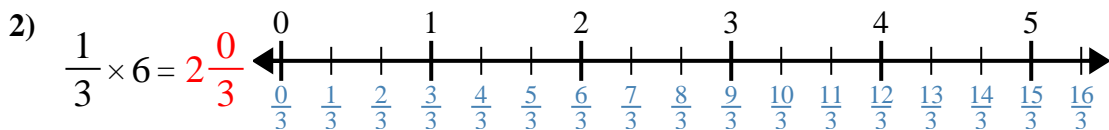
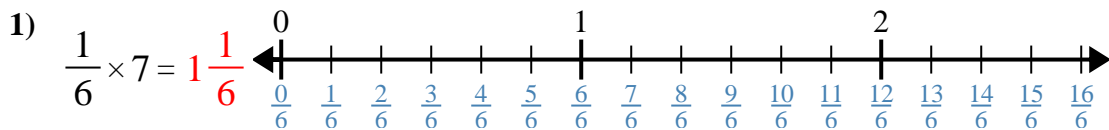


Answers

1. _____
2. _____
3. _____
4. _____
5. _____
6. _____
7. _____
8. _____
9. _____
10. _____



Use the numberline to solve.



Answers

1. $1\frac{1}{6}$

2. $2\frac{0}{3}$

3. $\frac{3}{4}$

4. $1\frac{2}{5}$

5. $\frac{5}{10}$

6. $2\frac{2}{3}$

7. $3\frac{1}{2}$

8. $\frac{7}{8}$

9. $1\frac{1}{2}$

10. $1\frac{0}{3}$



Use the numberline to solve.

$\frac{5}{10}$	$1\frac{1}{6}$	$1\frac{2}{5}$	$2\frac{0}{3}$
$1\frac{0}{3}$	$1\frac{1}{2}$	$3\frac{1}{2}$	$\frac{3}{4}$
$\frac{7}{8}$	$2\frac{2}{3}$		

Answers

1)

1. _____

2)

2. _____

3)

3. _____

4)

4. _____

5)

5. _____

6)

6. _____

7)

7. _____

8)

8. _____

9)

9. _____

10)

10. _____